


LE FRAZIONI


- Cerchia la frazione corrispondente alle parti colorate di ogni figura geometrica.



$$\frac{1}{2}$$

$$\frac{2}{3}$$

$$\frac{2}{4}$$



$$\frac{1}{3}$$

$$\frac{3}{4}$$

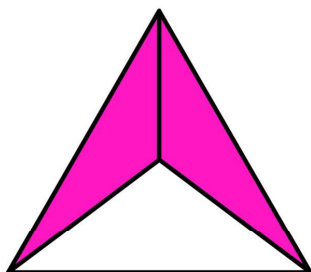
$$\frac{1}{2}$$



$$\frac{2}{4}$$

$$\frac{3}{5}$$

$$\frac{1}{4}$$



$$\frac{2}{3}$$

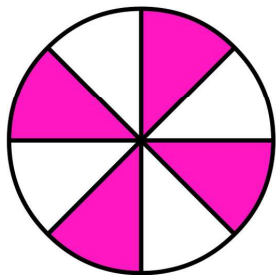
$$\frac{1}{3}$$

$$\frac{1}{2}$$

- Saper riconoscere e mettere in relazione frazioni e quantità.

LE FRAZIONI


- Cerchia la frazione corrispondente alle parti colorate di ogni figura geometrica.



$$\frac{3}{6}$$

$$\frac{3}{5}$$

$$\frac{4}{8}$$



$$\frac{4}{5}$$

$$\frac{1}{3}$$


$$\frac{3}{4}$$



$$\frac{5}{6}$$

$$\frac{3}{7}$$

$$\frac{1}{8}$$



$$\frac{2}{7}$$





$$\frac{4}{8}$$

$$\frac{3}{6}$$

- Saper riconoscere e mettere in relazione frazioni e quantità.

LE FRAZIONI

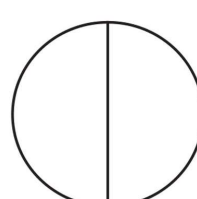
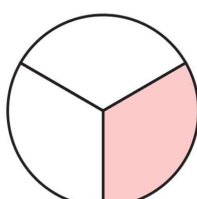
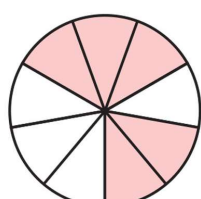
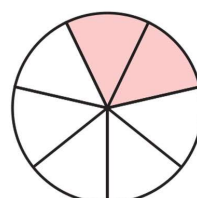
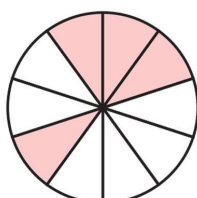
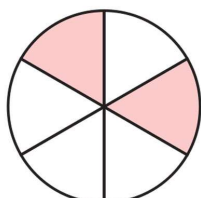
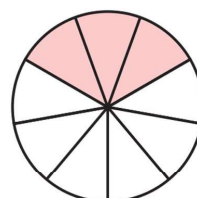
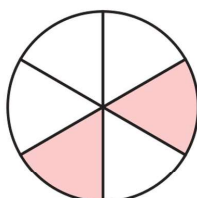
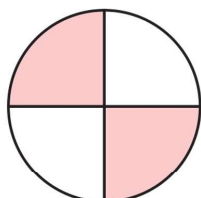
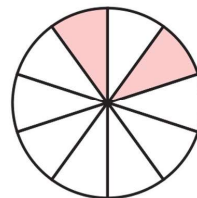
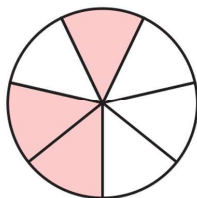
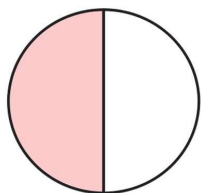
- Scrivi la frazione corrispondente alle parti colorate di ogni figura geometrica.



- Saper riconoscere e mettere in relazione frazioni e quantità.

LE FRAZIONI

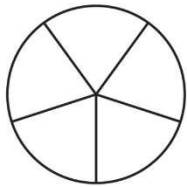
- Scrivi la frazione corrispondente alle parti colorate di ogni figura geometrica.



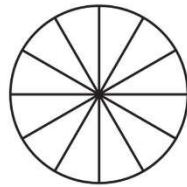
- Saper riconoscere e mettere in relazione frazioni e quantità.

LE FRAZIONI

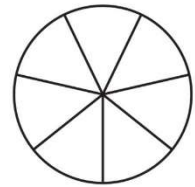
- Colora le parti delle figure geometriche corrispondenti alle frazioni date.



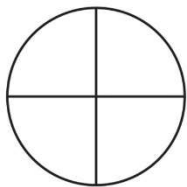
Colora $\frac{3}{5}$



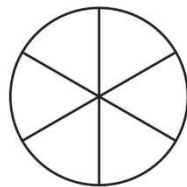
Colora $\frac{7}{12}$



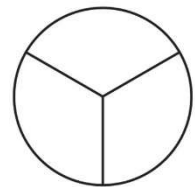
Colora $\frac{5}{7}$



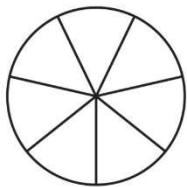
Colora $\frac{3}{4}$



Colora $\frac{1}{6}$



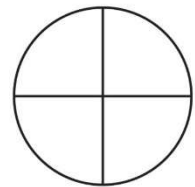
Colora $\frac{2}{3}$



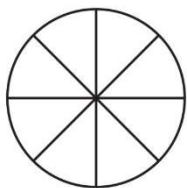
Colora $\frac{2}{7}$



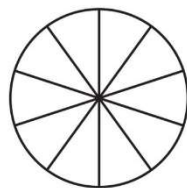
Colora $\frac{4}{5}$



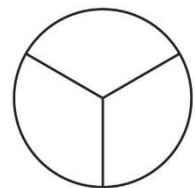
Colora $\frac{1}{4}$



Colora $\frac{7}{8}$



Colora $\frac{9}{10}$









Colora $\frac{1}{3}$

- Saper riconoscere e mettere in relazione frazioni e quantità.

LE FRAZIONI

- Conta i riquadri colorati e scrivi la frazione corrispondente.



- Saper riconoscere e mettere in relazione frazioni e quantità.