


# LE FRAZIONI


- Cerchia la frazione corrispondente alle parti colorate di ogni figura geometrica.



$$\frac{1}{2}$$

$$\frac{2}{3}$$

$$\frac{2}{4}$$



$$\frac{1}{3}$$

$$\frac{3}{4}$$


$$\frac{1}{2}$$



$$\frac{2}{4}$$

$$\frac{3}{5}$$

$$\frac{1}{4}$$



$$\frac{2}{3}$$

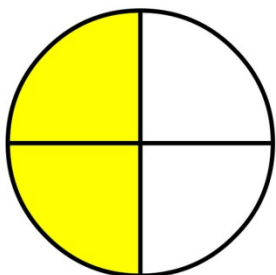
$$\frac{1}{3}$$

$$\frac{1}{2}$$

- Saper riconoscere e mettere in relazione frazioni e quantità.

# LE FRAZIONI


- Cerchia la frazione corrispondente alle parti colorate di ogni figura geometrica.



$$\frac{2}{5}$$

$$\frac{2}{4}$$

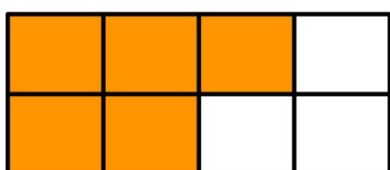
$$\frac{1}{4}$$



$$\frac{2}{3}$$

$$\frac{1}{4}$$

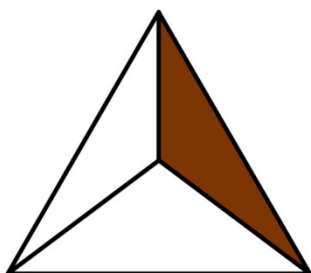
$$\frac{3}{4}$$



$$\frac{2}{4}$$

$$\frac{5}{6}$$

$$\frac{5}{8}$$



$$\frac{1}{3}$$

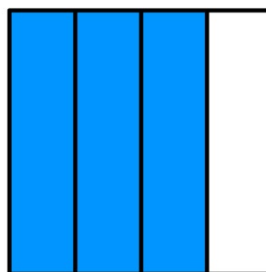
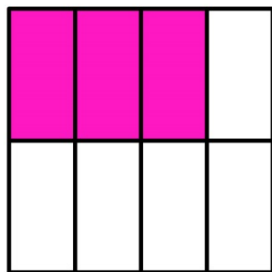
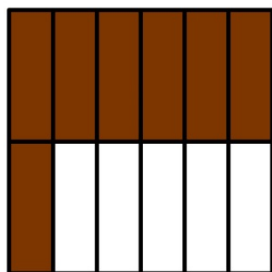
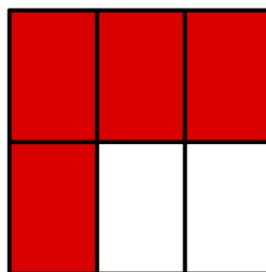

$$\frac{1}{2}$$

$$\frac{2}{4}$$

- Saper riconoscere e mettere in relazione frazioni e quantità.

# LE FRAZIONI

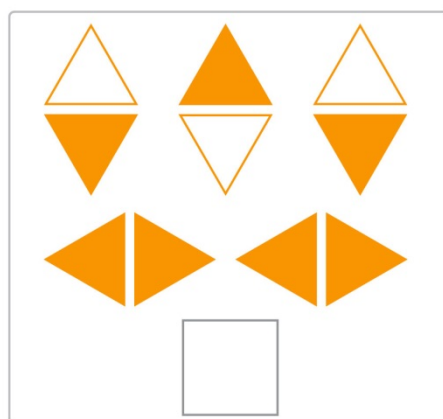
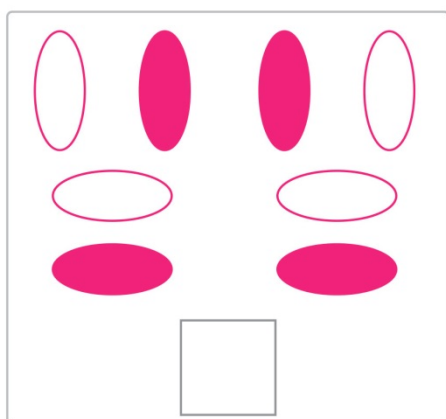
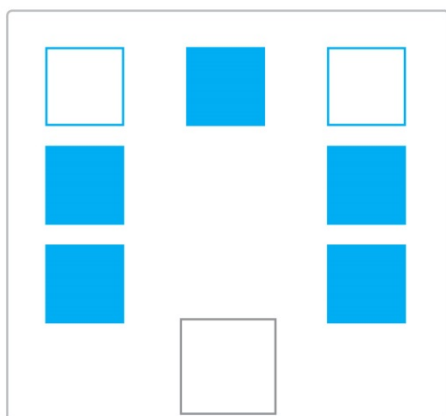
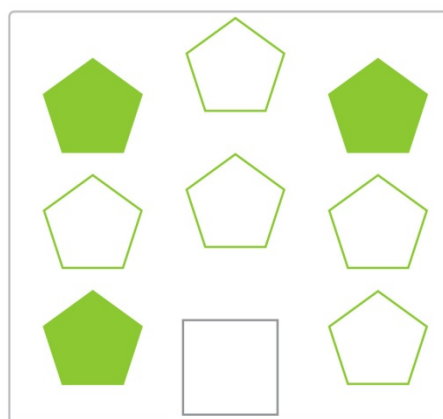
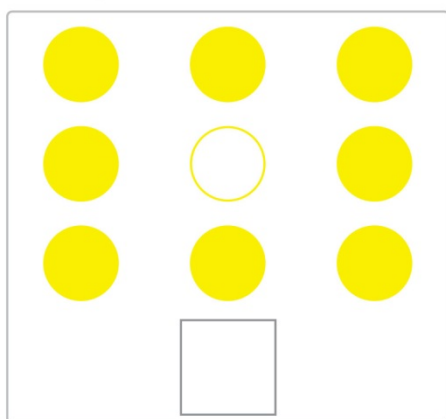
- Scrivi la frazione corrispondente alle parti colorate di ogni figura geometrica.



- Saper riconoscere e mettere in relazione frazioni e quantità.

# LE FRAZIONI

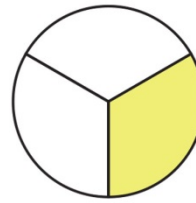
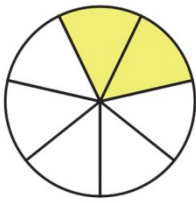
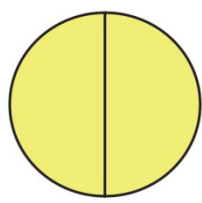
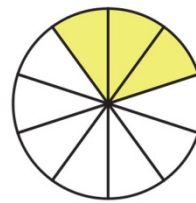
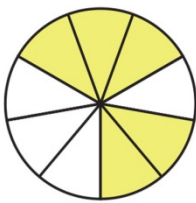
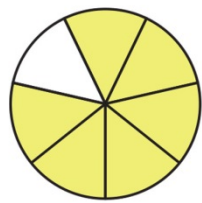
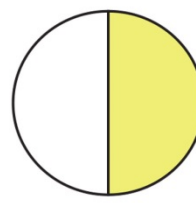
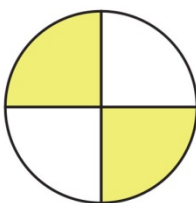
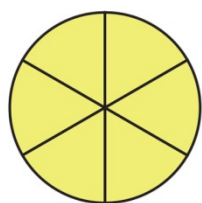
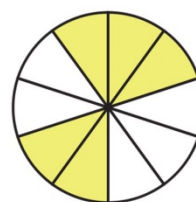
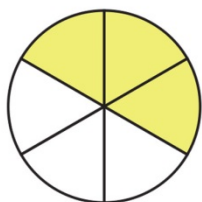
- Scrivi la frazione corrispondente alle figure geometriche colorate in ogni riquadro.



- Saper riconoscere e mettere in relazione frazioni e quantità.

# LE FRAZIONI

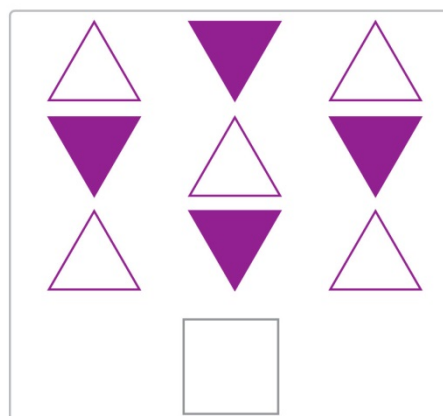
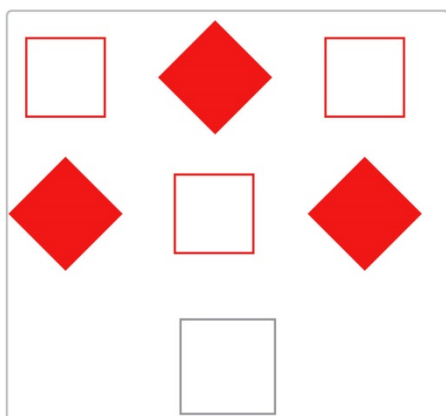
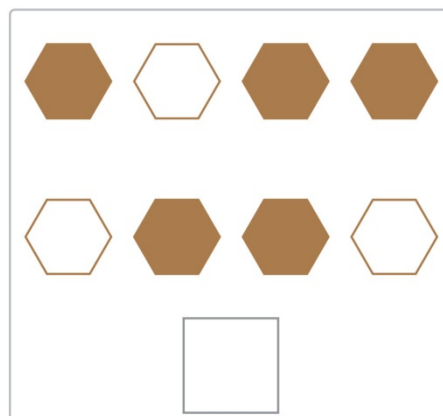
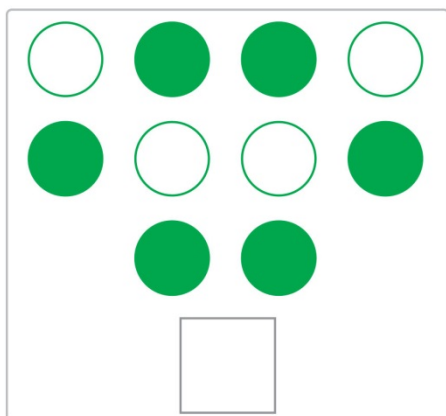
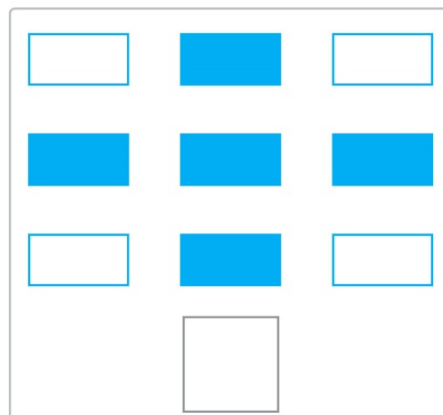

- Scrivi la frazione corrispondente alle parti colorate di ogni figura geometrica.



- Saper riconoscere e mettere in relazione frazioni e quantità.

# LE FRAZIONI

- Scrivi la frazione corrispondente alle figure geometriche colorate in ogni riquadro.



• Saper riconoscere e mettere in relazione frazioni e quantità.

